

CS 61C RISC-V Addressing and Caches
 Fall 2018 Discussion 5: September 24, 2018

1 RISC-V Addressing

We have several *addressing modes* to access memory (immediate not listed):

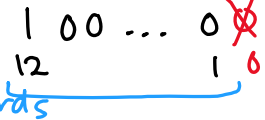
1. Base displacement addressing adds an immediate to a register value to create a memory address (used for lw, lb, sw, sb).
2. PC-relative addressing uses the PC and adds the immediate value of the instruction (multiplied by 2) to create an address (used by branch and jump instructions).
3. Register Addressing uses the value in a register as a memory address (jr)

data access

control jumps/
mem accesses

1.1 What is range of 32-bit instructions that can be reached from the current PC using a branch instruction?

12 bit imm $[-2^{11}, 2^{11}-1]$ half words
 $[-2^{10}, 2^{10}-1]$ words (instructions)



1.2 What is the range of 32-bit instructions that can be reached from the current PC using a jump instruction?

~~12 bit~~

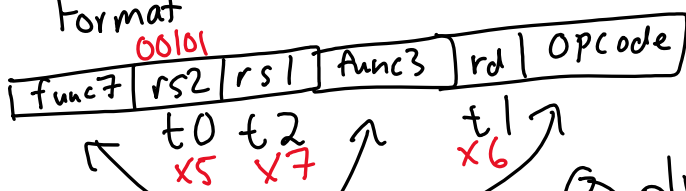
1.3 Given the following RISC-V code (and instruction addresses), fill in the blank fields for the following instructions (you'll need your RISC-V green card!).

```

1 0x002cff00: loop: add t1, t2, t0      |-----|-----|-----|-----|_0x33_|
2 0x002cff04:      jal ra, foo          |-----|-----|-----|-----|_0x6F_|
3 0x002cff08:      bne t1, zero, loop    |-----|-----|-----|-----|_0x63_|
4 ...
5 0x002cff2c: foo: jr ra                ra=-----
    
```

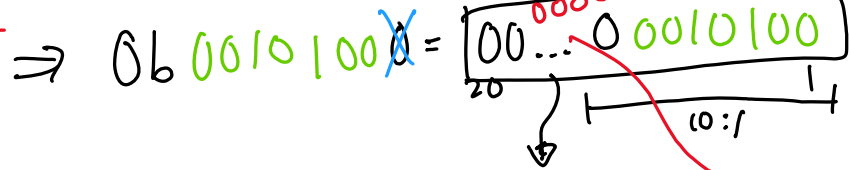
① Find type of instruction
 add: R type
 jal: UJ-Type

② Find Format



③ plug in values

jal
 $\frac{31}{2}$
 $0x002cff2c$
 $-0x062c ff04$
 $0x28$



$\log(\text{Block Size}) = \text{offset bits}$



2 Understanding T/I/O

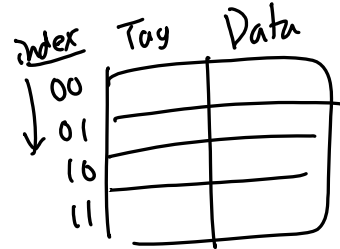
When working with caches, we have to be able to break down the memory addresses we work with to understand where they fit into our caches. There are three fields:

leftover

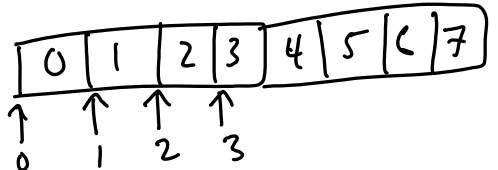
Tag - Used to distinguish different blocks that use the same index - Number of bits: leftovers

Index - The set that this piece of memory will be placed in - Number of bits: $\log_2(\# \text{ of indices})$

Offset - The location of the byte in the block - Number of bits: $\log_2(\text{size of block})$



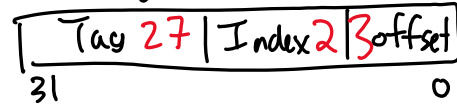
2.1 Assume we have a direct-mapped byte-addressed cache with capacity 32B and block size of 8B. Of the 32 bits in each address, which bits do we use to find the index of the cache to use?



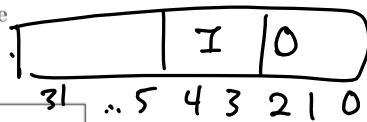
$0: \log 8 = 3$ $\frac{32}{8} = 4$ $I: \log 4 = 2$

2.2 Which bits are our tag bits? What about our offset?

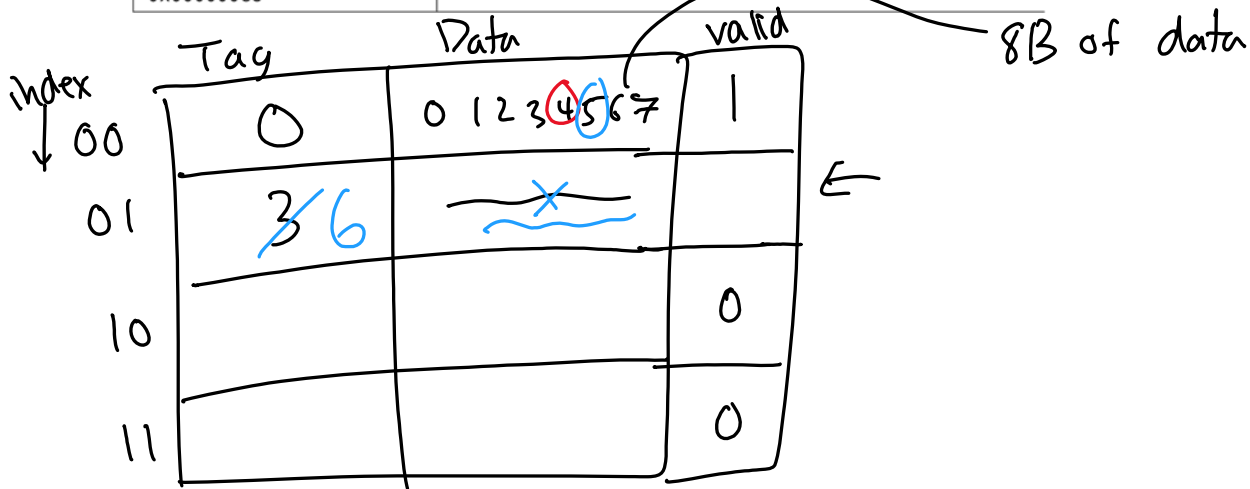
$0: 2$ $I: 3:4$ $T: 5:31$



2.3 Classify each of the following byte memory accesses as a cache hit (H), cache miss (M), or cache miss with replacement (R). It is probably best to try drawing out the cache before going through so that you can have an easier time seeing the replacements in the cache. The following white space is to do this:



Address	T/I/O	Hit, Miss, Replace
0x00000004 → 0100	0 0 4	M, comp
0x00000005 → 0101	0 0 5	H
0x00000068 → 01101000	3 1 0	M comp
0x000000C8	6 1 0	M (12), comp
0x00000068	3 1 0	R, conflict
0x000000DD		
0x00000045		
0x00000004		
0x000000C8		



3 The 3 C's of Misses

3.1 Classify each M and R above as one of the 3 types of misses described below:

- I. Compulsory: First time you ask the cache for a certain block. A miss that must occur when you first bring in a block. Reduce compulsory misses by having a longer cache lines (bigger blocks), which bring in the surrounding addresses along with our requested data. Can also pre-fetch blocks beforehand using a hardware prefetcher (a special circuit that tries to guess the next few blocks that you will want).
- II. Conflict: Occurs if you hypothetically went through the ENTIRE string of accesses with a fully associative cache and wouldn't have missed for that specific access. Increasing the associativity or improving the replacement policy would remove the miss.
- III. Capacity: The only way to remove the miss is to increase the cache capacity, as even with a fully associative cache, we had to kick a block out at some point.

never see data before → comp miss
 kick out could be better
 cache too small

Note: There are many different ways of fixing misses. The name of the miss doesn't necessarily tell us the best way to reduce the number of misses.

4 ~~Exam~~ Practise

In the following diagrams, each blank box represents 1 byte (8 bits) of data. All of memory is byte addressed. Let's say we have a 8192KiB cache with an 128B block size. How many bits are in tag, index, and offset? What parts of the address of 0xFEEDF00D fit into which sections?

$0x0D = 0000\ 1101$

	Tag	Index	Offset
Number of bits	9	16	7
Bits of address			000 1101

$O: \log 128 = 7 \text{ bits}$ $I: \frac{2^{13} \cdot 2^{16} \text{ B}}{2^7 \text{ B}} = 2^{16}$ $\log 2^{16} = 16 \text{ bits}$

$32 - 16 - 7 = 9$

4.2 Now fill in the table below. Assume that we have a write-through cache, so the number of bits per row includes only the cache data, the tag, and the valid bit.

Address size (bits)	Cache Size	Block Size	Tag Bits	Index Bits	Offset Bits	Bits per row
16	4KiB	4B				
32	32KiB	16B				
32			16	12		
64	2048KiB			14		1068